

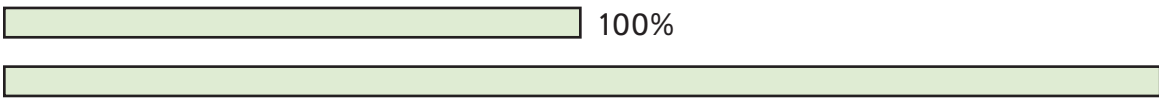



Homework

Activity 1


Estimate the second percent using the pairs of percent strips.


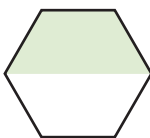

Model  100% ? %
 Answer: About 150%

-  100% ? %
-  100% ? %
-  100% ? %

Activity 2

Estimate the percent of the shape that has been shaded.

Model  Answer: About 75%

- 
- 
- 

Activity 3

Round the decimal numbers to the nearest hundredth and write the percent equivalent.

- 0.2341234123
- 0.9999999999
- 0.0555555555
- 0.7052379815

Activity 4 • Distributed Practice

Solve.

- $0.22 + 0.88 + 0.219$
- $\frac{4}{3} \cdot \frac{5}{3}$
- $\frac{27}{9} \div \frac{1}{3}$